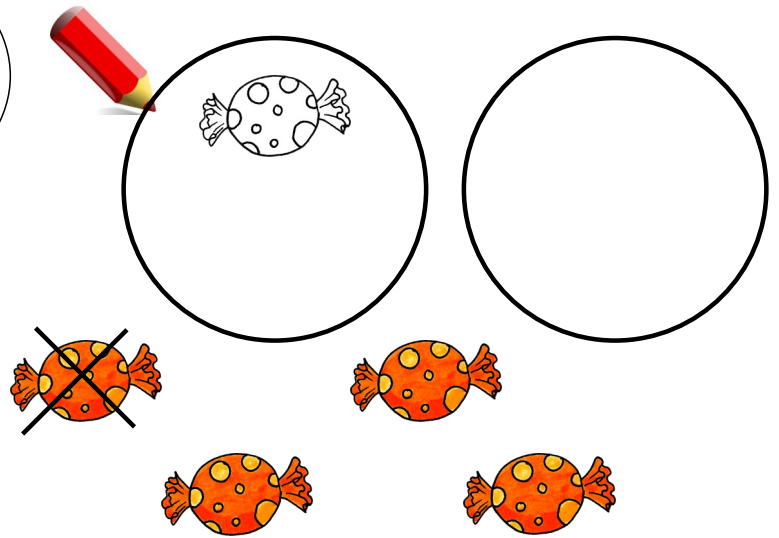


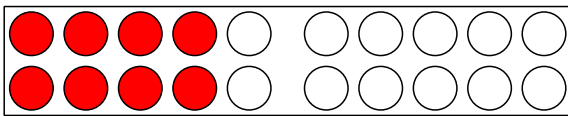
Name: _____

Halbieren

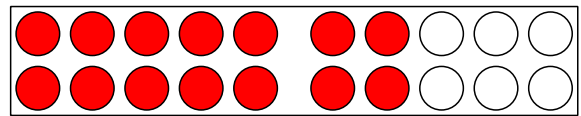
Teile die
Zuckerl gerecht
auf die zwei
Teller auf.



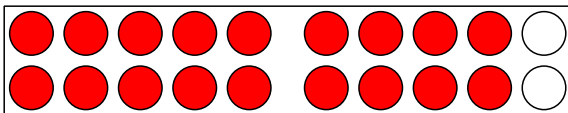
Schreibe die passende Rechnung auf.



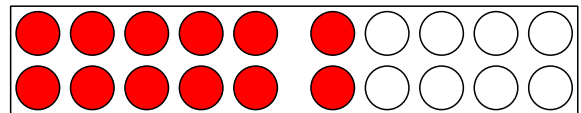
$$8 = 4 + 4$$



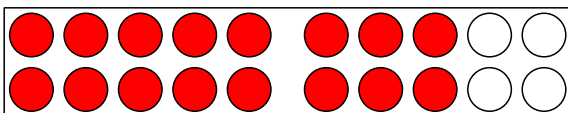
$$14 = \square + \square$$



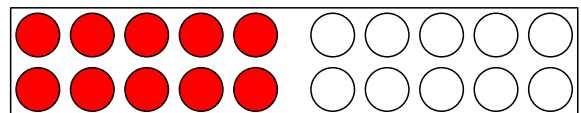
$$18 = \square + \square$$



$$12 = \square + \square$$



$$16 = \square + \square$$



$$10 = \square + \square$$

$$10 = 5 + 5$$

$$2 = \square + \square$$

$$8 = \square + \square$$

$$16 = \square + \square$$

$$18 = \square + \square$$

$$14 = \square + \square$$

$$4 = \square + \square$$

$$6 = \square + \square$$

$$12 = \square + \square$$